



SPAG Activity:

Section 1
Write a sentence that contains an apostrophe and a conjunction about the shoes.



Section 2
Oops! Mr Whoops has accidentally replaced some of the words within his sentences with his favourite sweets! What type of word needs to replace each one?

Nervously, I approached the **fudge** door and pushed it open **gob-stopper**. There was a sudden shrieking noise **humbug** I turned and **jellybaby** out of the house.

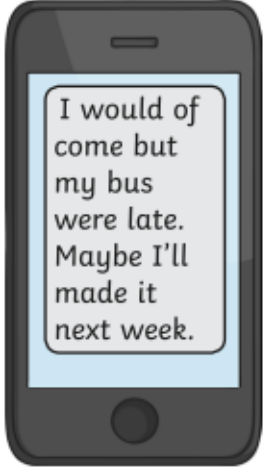


Section 3
Draw lines to join-up the words to make FIVE compound nouns.

earth	yard
farm	board
black	quake
wind	board
dart	mill

Now, on the back of your mat, use one of the compound nouns in a sentence with a subordinate clause.

Section 5
Can you re-write this text message so it is written in grammatically-correct Standard English?



Section 4
Can you think of a noun, verb, adjective and adverb beginning with...

	noun	verb	adjective	adverb
the letter b?				
the letter s?				

Section 6
Can you unjumble these maths-related Y3 spelling words?

lcirce _____

ghiet _____

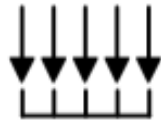
treqaur _____

arreglu _____

Adventure story word mat



In the blink of an
eye,



All of a sudden,



Suddenly,



Without warning,



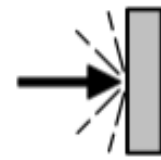
explored



hid



leapt



struck



frightened



nervous



heroic



courageous



strong



mighty



fierce



unstoppable

Maths Activity:

Section 1

Which number is the odd one out and why?

80 60 32 40 20

.....
.....

Section 2

Put these amounts of money in order from smallest to largest.

£3.21 £2.31 £1.32 £2.13

--	--	--	--

smallest

largest

Section 3

Fill in the missing numbers:

$12 \times \square = 48$

$36 \div \square = 9$

$\square \times 10 = 90$

$27 = 9 \times \square$

Section 4

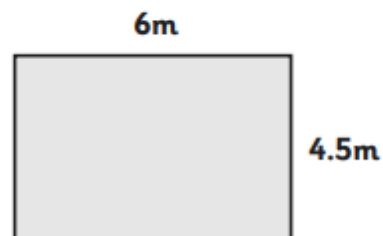
How much will it cost to buy six ice creams?



Ice Cream Cones
35p Each

Section 5

A rectangular dining room measures 4.5m and 6m. What is the perimeter of the room?



Section 6

Use Roman numerals to write the numbers:

$35 = \square$

$44 = \square$

Section 7

If there are five zebras and two ostriches in a zoo, how many legs are there altogether?



Section 8

Ben's cat eats two pouches of cat food each day. He buys a box holding 64 pouches. How many days will this last?